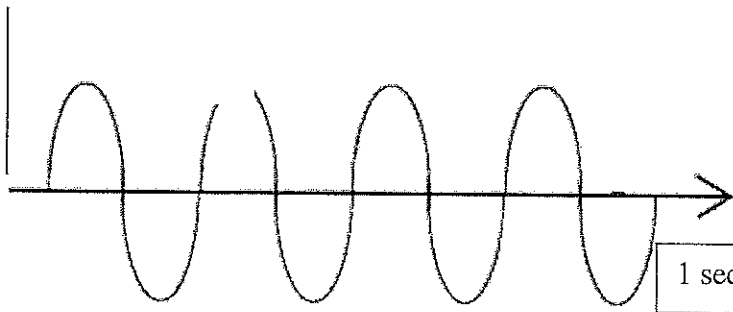


Oakland Schools Science Scope

3.

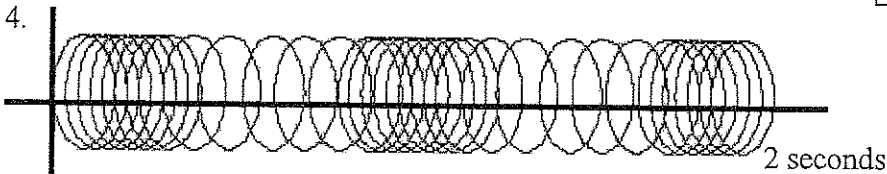


Amplitude _____
Wavelength _____

1 second

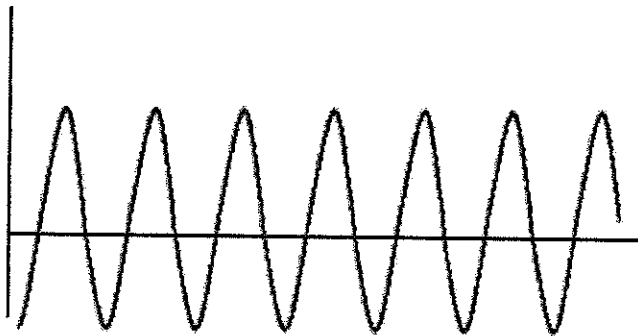
Amplitude _____
Wavelength _____

4.



2 seconds

5.



5 seconds

Amplitude _____
Wavelength _____

6. Draw your own wave below and determine the amplitude, wavelength, and frequency.

Amplitude _____
Wavelength _____