

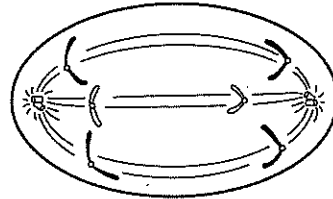
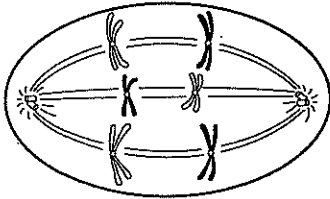
SECTION



Reinforcement

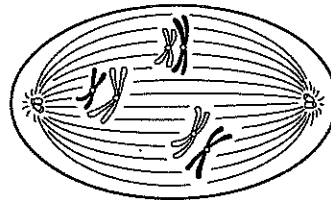
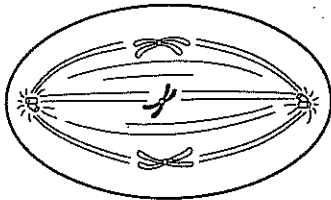
Sexual Reproduction and Meiosis

Directions: Study the following diagrams. Then label the appropriate steps of meiosis.



1. _____

2. _____



3. _____

4. _____

Directions: Answer the following questions on the lines provided.

5. In what way is meiosis II similar to mitosis?

6. What is a cell with pairs of chromosomes called? A cell with no pairs (single set)? of chromosomes?

7. Do centromeres divide at anaphase I or II?

8. Starting with one diploid cell, how many haploid sperm cells have formed after both phases of meiosis have been completed?

9. How are sex cells different from other cells in the body?

10. What happens during fertilization?
